

## 1. Completează.

: 3	× 7	: 4	× 6
24      8	3      _____	16      _____	6      _____
_____      9	_____      35	_____      8	_____      54
30      _____	6      _____	24      _____	3      _____
_____      6	_____      28	_____      5	_____      42

## 2. Amintește-ți și scrie.

$3 \times 5 = \underline{\quad}$	$5 \times 4 = \underline{\quad}$	$7 \times 10 = \underline{\quad}$	$4 \times 2 = \underline{\quad}$
$9 \times 4 = \underline{\quad}$	$0 \times 8 = \underline{\quad}$	$6 \times 8 = \underline{\quad}$	$7 \times 4 = \underline{\quad}$
$3 \times 2 = \underline{\quad}$	$6 \times 4 = \underline{\quad}$	$4 \times 10 = \underline{\quad}$	$9 \times 8 = \underline{\quad}$
$10 \times 10 = \underline{\quad}$	$4 \times 5 = \underline{\quad}$	$9 \times 5 = \underline{\quad}$	$7 \times 5 = \underline{\quad}$
$4 \times 4 = \underline{\quad}$	$8 \times 2 = \underline{\quad}$	$2 \times 8 = \underline{\quad}$	$3 \times 4 = \underline{\quad}$

## 3. Compară.

14 <input type="checkbox"/> 14	49 <input type="checkbox"/> 56	21 <input type="checkbox"/> 22	56 <input type="checkbox"/> 65
36 <input type="checkbox"/> 37	51 <input type="checkbox"/> 15	10 <input type="checkbox"/> 1	28 <input type="checkbox"/> 36
20 <input type="checkbox"/> 30	44 <input type="checkbox"/> 44	73 <input type="checkbox"/> 56	91 <input type="checkbox"/> 19
98 <input type="checkbox"/> 91	26 <input type="checkbox"/> 62	68 <input type="checkbox"/> 43	74 <input type="checkbox"/> 55
84 <input type="checkbox"/> 90	39 <input type="checkbox"/> 39	72 <input type="checkbox"/> 72	32 <input type="checkbox"/> 23

## 4. Scrie:

- în ordine crescătoare: 54, 91, 63, 85, 36, 15, 42;

- în ordine descrescătoare: 66, 51, 43, 56, 73, 68, 84.

## 5. Calculează în lanț.

× <input type="checkbox"/>	+ <input type="checkbox"/>	: <input type="checkbox"/>	+ 31	: 9	+ 38	: 7	+ 92
5	25	40	5	<input type="text"/>	<input type="text"/>	<input type="text"/>	<input type="text"/>




















### 1. Completează.

$$\begin{array}{l} \square\square : 8 \\ \square\square : 7 \\ \square\square : 10 \end{array} \rightarrow 5$$

$$\begin{array}{l} 54 : \square \\ 48 : \square \\ 18 : \square \end{array} \rightarrow 6$$

$$\begin{array}{l} 30 : \square \\ 45 : 9 \\ \square : 2 \end{array} \rightarrow \square$$

### 2. Ajută fluturii să găsească floarea potrivită.

 : $4 > 8$	 48	 33	 5	64 :  < 9
 : $8 < 7$	 32	 36	 :  = 6	
 : $7 = 9$	 40	 8	 :  > 5	

### 3. Problemă. În 4 coșuri sunt 36 kg de struguri. Câte kg sunt în 7 coșuri? În câte coșuri încap 9 kg?

Schemă:

Rezolvare (cu plan):

Răspuns: